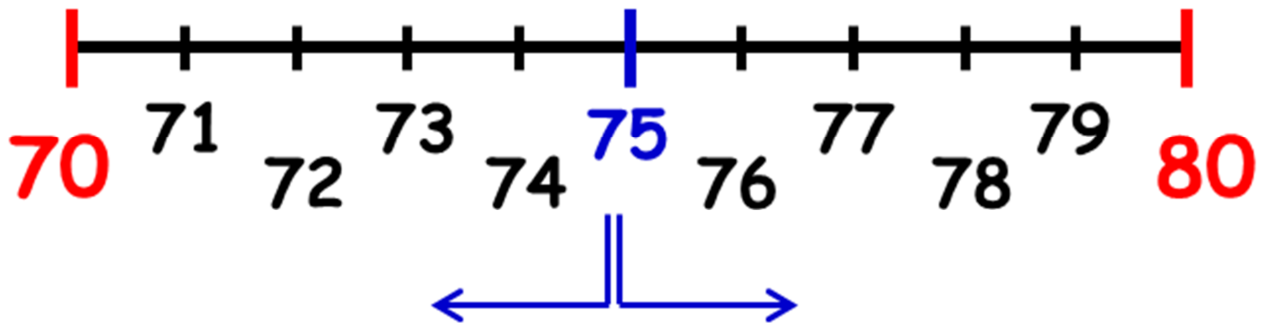


Približna vrijednost

Zaokruživanje na deseticu



$$70 \approx 70$$

$$71 \approx 70$$

$$72 \approx 70$$

$$73 \approx 70$$

$$74 \approx 70$$

$$75 \approx 80$$

$$76 \approx 80$$

$$77 \approx 80$$

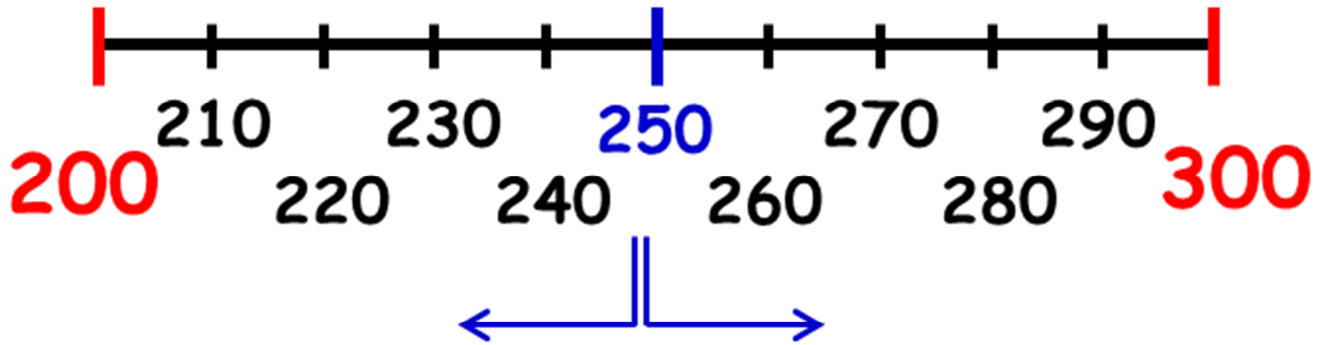
$$78 \approx 80$$

$$79 \approx 80$$



Približna vrijednost

Zaokruživanje na stoticu



$200 \approx 200$

$201 \approx 200$

$202 \approx 200$

...

$248 \approx 200$

$249 \approx 200$

$250 \approx 300$

$251 \approx 300$

$252 \approx 300$

...

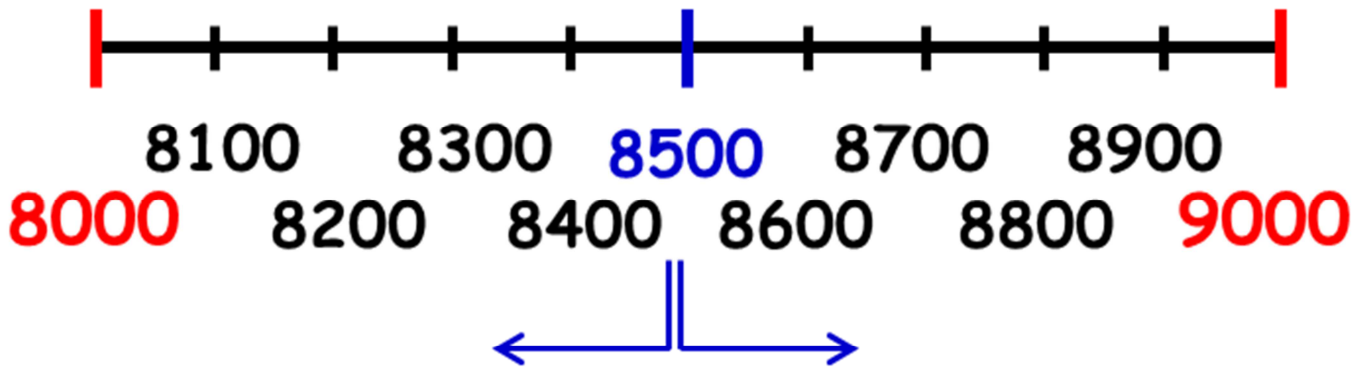
$298 \approx 300$

$299 \approx 300$



Približna vrijednost

Zaokruživanje na tisućicu



$8000 \approx 8000$

$8001 \approx 8000$

$8002 \approx 8000$

...

$8498 \approx 8000$

$8499 \approx 8000$

$8500 \approx 9000$

$8501 \approx 9000$

$8502 \approx 9000$

...

$8998 \approx 9000$

$8999 \approx 9000$



Približna vrijednost

Kad približnu vrijednost pišeš,
gledaj prvu znamenku koju *briseš*.
Od pet manje – isto stanje,
pet i više – jedan više.



$$183\ 654 \approx 200\ 000$$

$$183\ 654 \approx 180\ 000$$

$$183\ 654 \approx 184\ 000$$

$$183\ 654 \approx 183\ 700$$

$$183\ 654 \approx 183\ 650$$



Koja je prva *brisana* znamenka
u kojem slučaju?