

## Slagalica - razlomci

Ovdje možete naći zgodne zadatke koje petaši mogu rješavati nakon što nauče skraćivati razlomke, a kroz koje će ponoviti osnovno o razlomcima - kako sa sličice iščitati koji je dio pravokutnika obojen, te u nekim slučajevima još trebaju i skratiti dobiveni razlomak. Tu su dvije varijante - u boji i bez boje. Izaberite koja Vam je pogodnija.











Autor materijala: **Nenad Solić**

Najtoplije zahvaljujem kolegi Soliću na slanju materijala i dozvoli da ga objavim na svojim web stranicama.

Antonija Horvatek

















































*Matematika na dlanu*











<http://www.antonija-horvatek.from.hr/>

	$\frac{1}{6}$		$\frac{7}{12}$		$\frac{2}{3}$		
							$\frac{13}{15}$
$\frac{1}{2}$							
							$\frac{15}{16}$
$\frac{3}{5}$							
	$\frac{9}{12}$		$\frac{1}{11}$		$\frac{11}{16}$		

Sve kvadrate izreži i zatim ih zalijepi na 1. stranicu tako da svaki razlomak uz stranicu kvadrata odgovara obojenom dijelu pravokutnika uz stranicu drugog kvadrata.

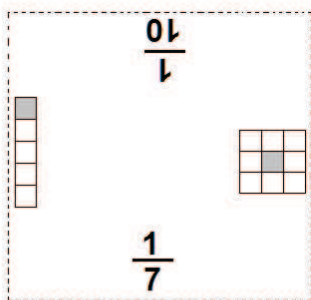
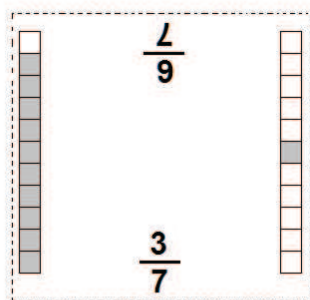
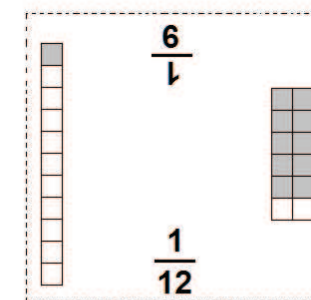
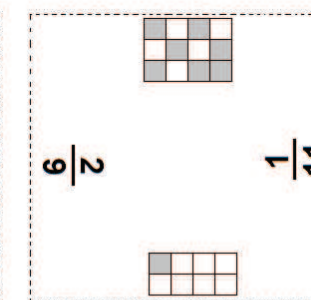
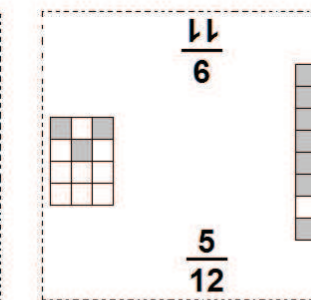
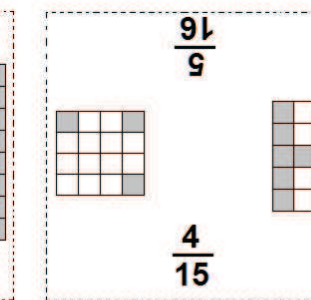
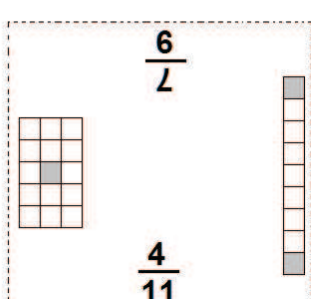
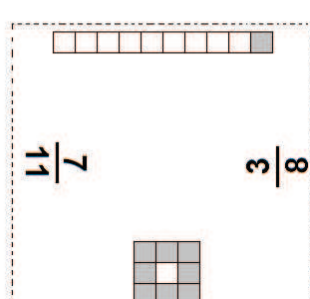
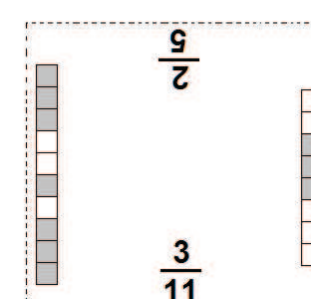
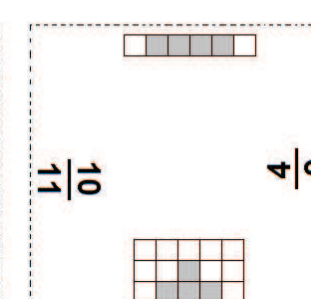
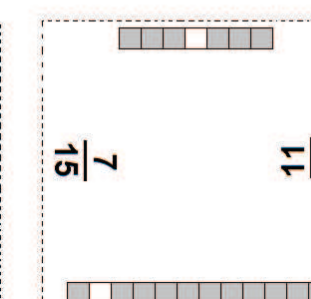
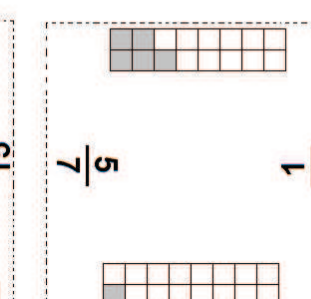
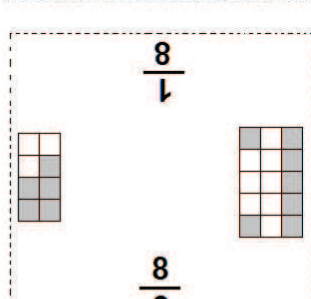
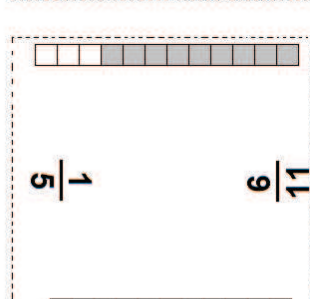
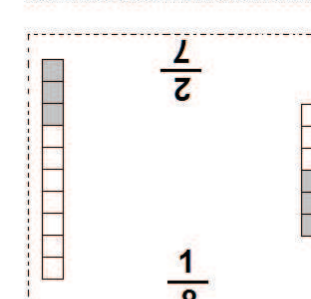
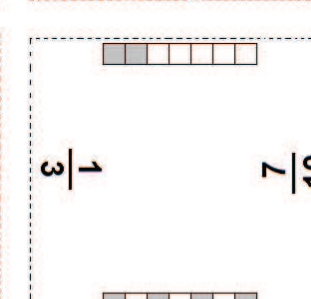
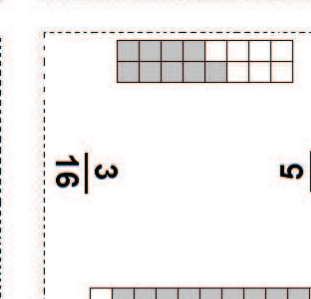
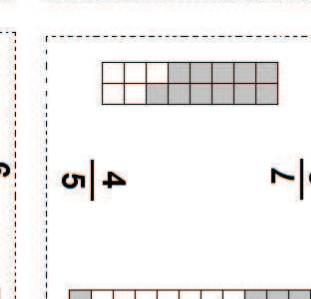
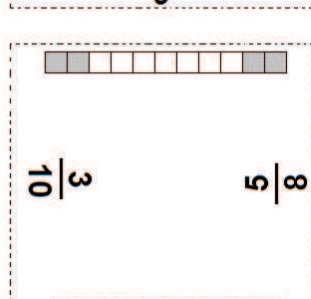
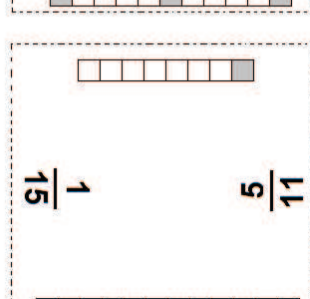
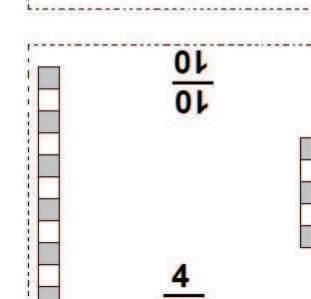
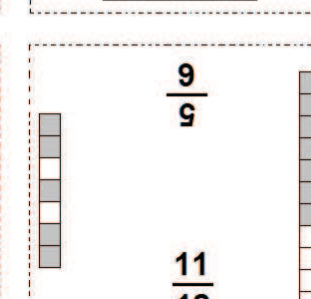
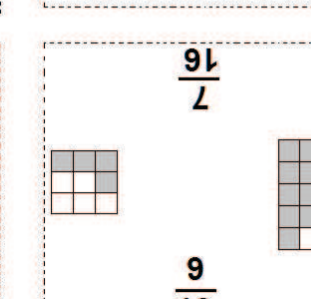
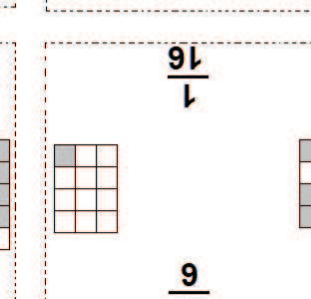
Nenad Solić

 $\frac{1}{7}$  $\frac{1}{10}$	 $\frac{3}{7}$  $\frac{7}{6}$	 $\frac{1}{12}$  $\frac{9}{1}$	 $\frac{1}{11}$  $\frac{2}{9}$	 $\frac{5}{12}$  $\frac{11}{9}$	 $\frac{4}{15}$  $\frac{16}{5}$
 $\frac{4}{11}$  $\frac{9}{7}$	 $\frac{3}{8}$  $\frac{7}{11}$	 $\frac{3}{11}$  $\frac{5}{2}$	 $\frac{4}{6}$  $\frac{10}{11}$	 $\frac{7}{15}$  $\frac{11}{15}$	 $\frac{5}{7}$  $\frac{1}{4}$
 $\frac{8}{6}$  $\frac{1}{8}$	 $\frac{1}{5}$  $\frac{11}{6}$	 $\frac{1}{8}$  $\frac{7}{2}$	 $\frac{1}{3}$  $\frac{10}{7}$	 $\frac{3}{16}$  $\frac{6}{5}$	 $\frac{4}{5}$  $\frac{8}{7}$
 $\frac{3}{10}$  $\frac{8}{5}$	 $\frac{1}{15}$  $\frac{11}{5}$	 $\frac{4}{7}$  $\frac{10}{10}$	 $\frac{11}{12}$  $\frac{6}{5}$	 $\frac{6}{16}$  $\frac{7}{16}$	 $\frac{6}{10}$  $\frac{1}{16}$

	$\frac{1}{6}$		$\frac{7}{12}$		$\frac{2}{3}$		
							$\frac{13}{15}$
$\frac{1}{2}$							
							$\frac{15}{16}$
$\frac{3}{5}$							
	$\frac{9}{12}$		$\frac{1}{11}$		$\frac{11}{16}$		

Sve kvadrate izreži i zatim ih zalijepi na 1. stranicu tako da svaki razlomak uz stranicu kvadrata odgovara obojenom dijelu pravokutnika uz stranicu drugog kvadrata.

Nenad Solić

 $\frac{1}{10}$ $\frac{1}{7}$	 $\frac{7}{6}$ $\frac{3}{7}$	 $\frac{9}{1}$ $\frac{1}{12}$	 $\frac{2}{6}$ $\frac{1}{11}$	 $\frac{11}{9}$ $\frac{5}{12}$	 $\frac{16}{5}$ $\frac{4}{15}$
 $\frac{9}{7}$ $\frac{4}{11}$	 $\frac{7}{11}$ $\frac{3}{8}$	 $\frac{5}{2}$ $\frac{3}{11}$	 $\frac{10}{11}$ $\frac{4}{9}$	 $\frac{7}{15}$ $\frac{11}{15}$	 $\frac{5}{7}$ $\frac{1}{4}$
 $\frac{8}{1}$ $\frac{8}{6}$	 $\frac{11}{9}$ $\frac{1}{5}$	 $\frac{7}{2}$ $\frac{1}{8}$	 $\frac{10}{7}$ $\frac{1}{3}$	 $\frac{6}{5}$ $\frac{3}{16}$	 $\frac{4}{5}$ $\frac{8}{7}$
 $\frac{3}{10}$ $\frac{8}{5}$	 $\frac{1}{15}$ $\frac{11}{5}$	 $\frac{10}{10}$ $\frac{4}{7}$	 $\frac{6}{5}$ $\frac{11}{12}$	 $\frac{16}{7}$ $\frac{6}{16}$	 $\frac{1}{16}$ $\frac{9}{10}$