







Kako "puta" postaje "od"?

Zadatak	Zamišljamo...	"Puti" ili "od"?	Slika	Rezultat
$2 \cdot 6$	dvije šestice	dva <u>puta</u> po 6		12
$1 \cdot 6$	jedna šestica	jedan <u>put</u> po 6		6
$\frac{1}{2} \cdot 6$	pola šestice	pola <u>od</u> 6		3
$\frac{1}{3} \cdot 6$	trećina šestice	trećina <u>od</u> 6		2
$\frac{2}{3} \cdot 6$	dvije trećine šestice	$\frac{2}{3}$ <u>od</u> 6		4
$\frac{1}{2} \cdot 7$	pola sedmice	$\frac{1}{2}$ <u>od</u> 7		$3\frac{1}{2}$