

Brojanje po 2 - do 20


1. Prepiši u bilježnicu i nastavi niz (broji po 2):


- a) 2, 4, ____, ____, ____, ____, ____, ____, ____, 20
- b) 10, 12, ____, ____, ____, 20
- c) 6, 8, ____, ____, ____, ____, ____, 20
- d) 12, 14, ____, ____, 20
- e) 4, 6, ____, ____, ____, ____, ____, ____, 20
- f) 14, ____, ____, ____, ____, 20
- g) 8, 10, ____, ____, ____, ____, 20
- h) 16, ____, ____, 20


2. Prepiši i dopuni (broji po 2):


- a) 14, ____, ____, 20
- b) 10, ____, ____, 16
- c) 8, ____, ____, ____, ____, 18
- d) 18, ____, ____, 20
- e) 12, ____, ____, 18, ____, 20
- f) 6, ____, ____, ____, 14, ____, 20
- g) 16, ____, ____, 20
- h) 14, ____, 18, ____, 20


3. Precrtaj i napiši koliko je novaca na slici:


a) 


b) 


c) 


d) 


e) 

f) 

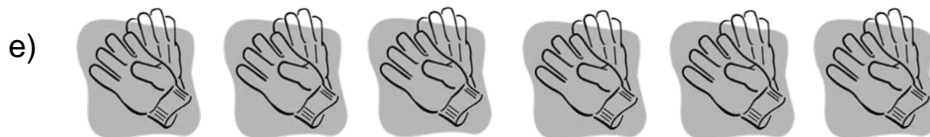
g) 

h) 

i) 

j) 

4. **Broji po 2** i izbroji koliko je čega na slici:



5. Nacrtaj koliko kovanica **od 2 kune** moraš uzeti da bi imao zadanu svotu novca (vidi kako je riješen a zadatak):



b) 10 kn,

f) 20 kn,

c) 6 kn,

g) 18 kn,


d) 16 kn,

h) 12 kn,

e) 8 kn,

i) 14 kn.

6. Precrtaj i napiši koliko je novaca na slici:

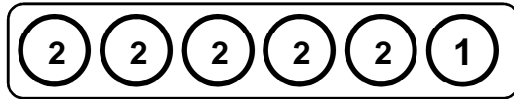


7. Precrtaj i napiši koliko je novaca na slici. Pazi, tu su kovanice od 2 kn i 1 kn!



8. Nacrtaj kovanice od 2 kn i 1 kn koje moraš uzeti da bi imao zadanu svotu novca. Neka bude **što je moguće više kovanica od 2 kn** (vidi kako je riješen a zadatak):

a) 11 kn



b) 5 kn,

f) 20 kn,

c) 9 kn,

g) 7 kn,

d) 13 kn,

h) 17 kn,

e) 19 kn,

i) 15 kn.

9. Precrtaj i napiši koliko je novaca na slici:

a)



d)



b)



e)



c)



f)



10. Prepiši i izračunaj (dodajemo 2):

a) $12 + 2 =$

d) $10 + 2 =$

g) $2 + 2 =$

b) $16 + 2 =$

e) $6 + 2 =$

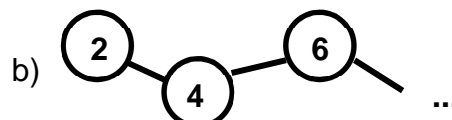
h) $8 + 2 =$

c) $4 + 2 =$

f) $18 + 2 =$

i) $14 + 2 =$

11. Precrtaj i nastavi niz:



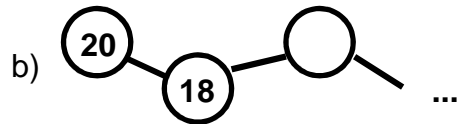
12. Broji unazad po 2:

- a) 10, 8, 6, ____, ____
- b) 14, 12, ____, ____, ____, ____, ____
- c) 6, 4, ____
- d) 12, 10, ____, ____, ____, ____
- e) 20, 18, ____, ____, ____, ____, ____, ____, ____, ____
- f) 8, ____, ____, ____
- g) 18, 16, ____, ____, ____, ____, ____, ____, ____
- h) 16, 14, ____, ____, ____, ____, ____, ____

13. Prepiši i izračunaj (oduzmi 2):

- | | | | |
|---------------|---------------|---------------|---------------|
| a) $12 - 2 =$ | d) $10 - 2 =$ | g) $2 - 2 =$ | j) $20 - 2 =$ |
| b) $16 - 2 =$ | e) $6 - 2 =$ | h) $8 - 2 =$ | k) $18 - 2 =$ |
| c) $4 - 2 =$ | f) $18 - 2 =$ | i) $14 - 2 =$ | l) $16 - 2 =$ |

14. Precrtaj i nastavi niz:



15. Nikola je imao 18 kuna. Kupio je žvakaću gumu za 2 kune. Koliko mu je kuna ostalo?

16. Mali Luka ima 14 kuna. Brat mu je dao još 2 kune i sestra još 2 kune. Koliko sad Luka ima kuna?

17. Danijela je u ponedjeljak imala 16 kuna. U utorak je potrošila 2 kune, u srijedu opet 2 kn i u četvrtak opet 2 kn. Koliko joj je kuna ostalo?

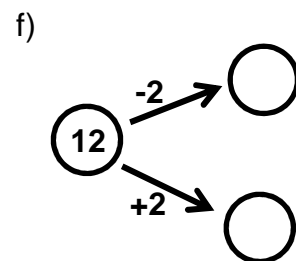
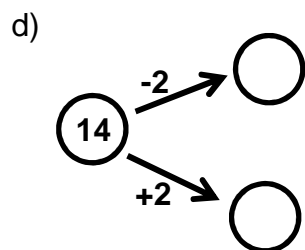
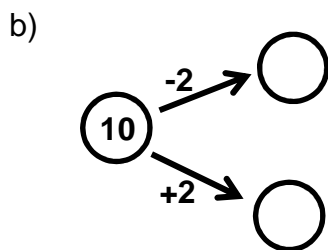
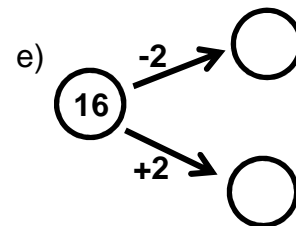
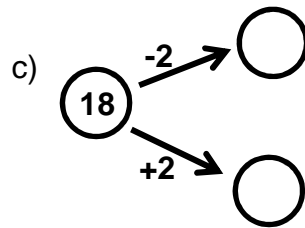
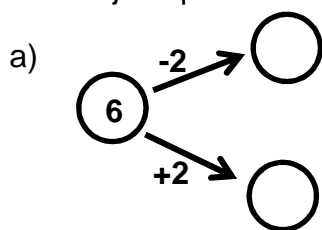
18. U jednom paru hrenovki su dvije hrenovke. Koliko je mama kupila hrenovki ako je kupila 8 parova?

19. U parku su na klupama bili zaljubljeni parovi. Tu je bilo 10 parova. Koliko je to mladića i djevojaka ukupno?

20. Prepiši i dopuni:

- | | |
|---------------------------------|----------------|
| a) 2, 4, 6, ... (nastavi do 20) | f) 18, 16, ... |
| b) 20, 18, ... (nastavi do 2) | g) 8, 10, ... |
| c) 6, 8, ... (do 20) | h) 16, 14, ... |
| d) 14, 12, ... (do 2) | i) 10, 8, ... |
| e) 4, 6, ... | j) 10, 12, ... |

21. Precrtaj i dopuni:



22. Prepiši i izračunaj:

- | | | |
|---------------|---------------|---------------|
| a) $10 + 2 =$ | e) $18 - 2 =$ | i) $14 + 2 =$ |
| b) $10 - 2 =$ | f) $8 + 2 =$ | j) $8 - 2 =$ |
| c) $14 - 2 =$ | g) $16 - 2 =$ | k) $6 + 2 =$ |
| d) $16 + 2 =$ | h) $20 - 2 =$ | l) $6 - 2 =$ |

23. Precrtaj i dopuni:

